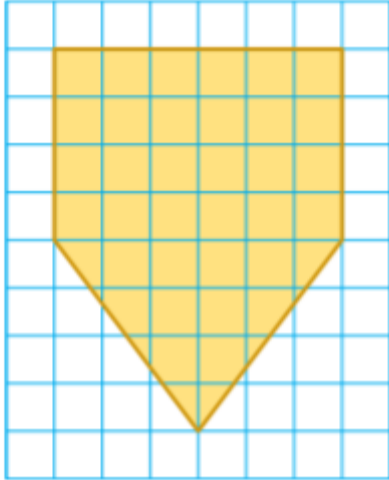


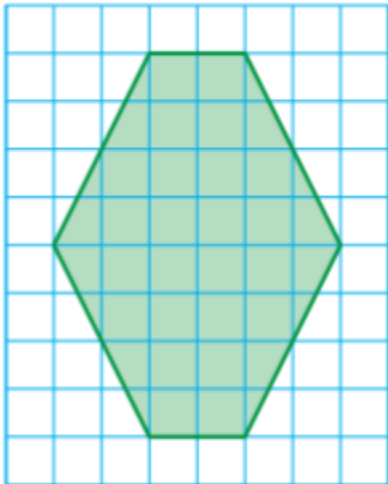
4.3 Extension Worksheet DAY 1

Find the area of the composite figures. There may be multiple ways to break up composite figures to find the area. Be sure to show your formulas, substitution, & answer with label!

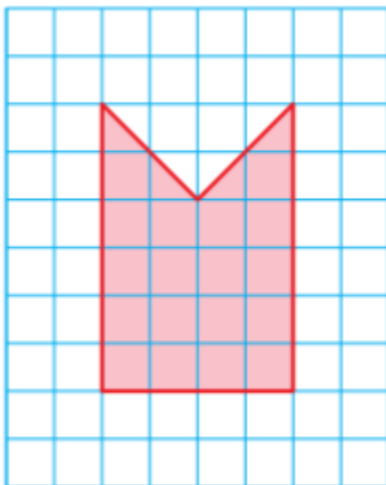
1.



2.



3.



Find the area of the composite figures. There may be multiple ways to break up composite figures to find the area. Be sure to show your formulas, substitution, & answer with label!

